



USN

--	--	--	--	--	--	--	--	--	--

10CS33

**Third Semester B.E. Degree Examination, June/July 2018**  
**Logic Design**

Time: 3 hrs.

Max. Marks:100

**Note: Answer any FIVE full questions, selecting  
atleast TWO questions from each part.**

**PART – A**

- 1 a. Define (i) period, (ii) frequency and (iii) duty cycle of a digital signal. The waveform has a frequency of 5 MHz and width of positive pulse is 0.05  $\mu$ s. What is the high duty cycle and low duty cycle? (06 Marks)
- b. What are universal gates? Realize the basic gates using NOR gates only. (04 Marks)
- c. What is the purpose of using an expander, with an AND-OR-INVERT gate? Write a logic circuit of an expander driving expandable AND-OR-INVERT gate. (05 Marks)
- d. What are the three different models for writing a module body in verilog HDL? Explain the structure of verilog module. (05 Marks)
- 2 a. Use k-map to simplify the following Boolean expression and give the implementation of the same using NOR gates only (pos form):  
 $F(A, B, C, D) = \Sigma m(0, 1, 2, 4, 5, 12, 14) + d(8, 10)$  (08 Marks)
- b. Simplify the following Boolean expression using Quine-Meclusky method  
 $F(A, B, C, D) = \Sigma m(1, 2, 8, 9, 10, 12, 13, 14)$  (08 Marks)
- c. What are static hazards? Explain with an example to design a hazard free circuit. (04 Marks)
- 3 a. Implement the following Boolean expression using a 4:1 multiplexer and external gates, Take 'AB' as input to multiplexer selection lines and CD as map entered variables (input variables).  
 $F(A, B, C, D) = \Sigma m(6, 7, 9, 10, 13) + d(1, 4, 5, 11)$  (06 Marks)
- b. Implement the following Boolean functions using PLA:  
 $f_1(a, b, c) = \Sigma m(0, 1, 3, 4)$   
 $f_2(a, b, c) = \Sigma m(1, 2, 3, 4, 5)$  (06 Marks)
- c. Design a 1-bit comparator. (04 Marks)
- d. Write a verilog module for 2:1 multiplexer using if else statement and case statement. (04 Marks)
- 4 a. What is Race around condition? How do you overcome this problem? (06 Marks)
- b. Show how a D-flip flop can be converted to SRFF. (06 Marks)
- c. Analyze the behavior of the sequential circuit shown in Fig.Q4(c) and draw the state table and state transition diagram. (08 Marks)

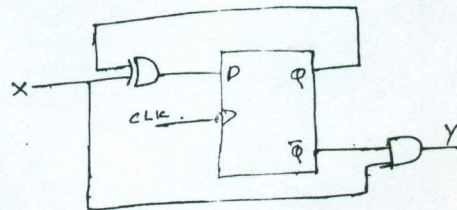


Fig.Q4(c)





**PART – B**

- 5 a. Explain the different types of shift registers and also explain how the shift registers can be used for counting applications. (10 Marks)
- b. Discuss with a neat diagram, how the shift register can be used for Serial Addition. (06 Marks)
- c. Explain with an example, the difference between Blocking assignment statements (=) and non Blocking assignment statements (<=>). (04 Marks)
- 6 a. Mention any two differences between asynchronous and synchronous counter, with a neat block diagram, output waveforms and truth table, explain a 3-bit ripple down counter constructed using negative-edge triggered JK flip-flops. (10 Marks)
- b. Design a self correcting modulo-6 synchronous counter using JK flip-flop as described in state sequence of Fig.Q6(b), in which all the unused state leads to state CBA = 000.

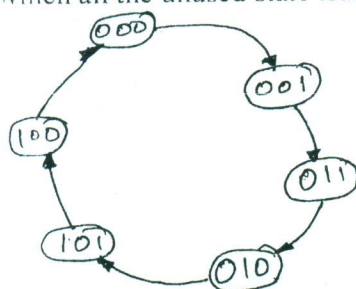


Fig.Q6(b)

(10 Marks)

- 7 a. Compare Moore and Mealy model of synchronous sequential circuit. (05 Marks)
- b. Draw the ASM chart for vending machine problem using Mealy model. (05 Marks)
- c. Reduce the state transition diagram of Fig.Q7(c) by  
 (i) Row elimination method      (ii) Implication Table method. (10 Marks)

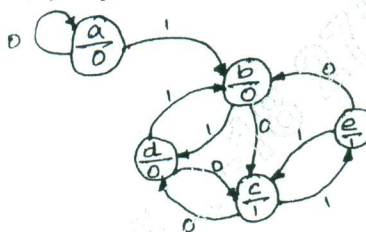


Fig.Q7(c)

- 8 a. What is Binary ladder? Explain the binary ladder with a digital input of 1000. (06 Marks)
- b. Discuss the working of the following A/D converters:
  - (i) 3 - bit simultaneous A/D converter
  - (ii) Continuous A/D converter. (10 Marks)
- c. A counter type 8-bit A/D converter driven by a 500 kHz clock, find
  - (i) The average conversion time
  - (ii) The maximum conversion rate. (04 Marks)

\*\*\*\*\*